

Universal Gas Constant (R) = $8.314 \text{ JK}^{-1}\text{mol}^{-1}$
Avogadro Number (N_A) = $6.022 \times 10^{23} \text{ mol}^{-1}$
Planck Constant (h) = $6.626 \times 10^{-34} \text{ Js}$
Velocity of Sound (C) = $3.0 \times 10^8 \text{ ms}^{-1}$

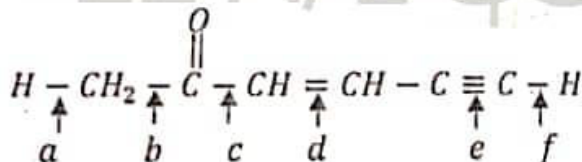
01. Select the correct answer regarding scientist related with following statements respectively.
(a) Nuclear positive charge increases by one unit of electrons.
(b) Discovery of positive charged particles of matter.

1. William Aston and Ernest Rutherford
2. Jefry Mosely and Eugen Goldstein
3. Jefry Mosely and Ernest Rutherford
4. Eujen Goldstein and Ernest Rutherford
5. Robert Millikan and Eugen Goldstein

02. A set of quantum numbers of last electron of Cr (Z=24) is,

1. $(4, 0, 0, +\frac{1}{2})$
2. $(5, 0, 0, +\frac{1}{2})$
3. $(4, 1, 0, +\frac{1}{2})$
4. $(5, 1, 0, +\frac{1}{2})$
5. $(4, 2, 1, +\frac{1}{2})$

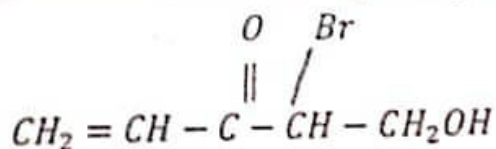
03. Consider molecule given below,



- Correct increasing order of bond lengths a, b, c, d, e and f is,

1. $b < c < d < e < a < f$
2. $e < d < c < b < f < a$
3. $c < b < d < e < a < f$
4. $f < a < e < d < c < b$
5. $a < f < e < c < d < b$

04. IUPAC name of the compound given below is,



1. 4-bromo-5-hydroxypent-1-en-3-one
2. 2-bromo-1-hydroxypent-4-en-3-one
3. 5-hydroxy-4-bromopent-1-en-3-one
4. 2-bromo-3-oxopent-4-en-1-ol
5. 2-bromo-3-oxopent-4-ene-1-ol

05. Correct statement regarding NO_3^- , NO_2^+ and NO_2^- is.
1. NO_2^+ and NO_2^- are angular in shape while NO_3^- is trigonal planar in shape.
 2. All species N is in same hybridation. ✓
 3. Hybridation of N in both NO_3^- and NO_2^- is sp^2 . ✓
 4. NO_2^+ has two $N-O$ bond with different bond length.
 5. NO_3^- is trigonal pyramidal in shape while NO_2^+ is angular in shape.

06. Correct increasing order of thermal stability is,

1. $Na_2CO_3 < MgCO_3 < NaHCO_3 < Mg(HCO_3)_2$
2. $MgCO_3 < Na_2CO_3 < NaHCO_3 < Mg(HCO_3)_2$
3. $Mg(HCO_3)_2 < MgCO_3 < NaHCO_3 < Na_2CO_3$
4. $MgCO_3 < Na_2CO_3 < Mg(HCO_3)_2 < NaHCO_3$
5. $MgCO_3 < Mg(HCO_3)_2 < Na_2CO_3 < NaHCO_3$

07. Select incorrect statement regarding electronegativity.

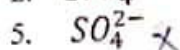

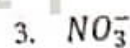
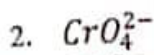
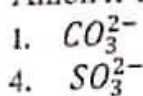
1. Electronegativity of C increases as $C_2H_6 < C_2H_4 < C_2H_2$ ✓
2. Electronegativity of N increases as $NH_2^- < NH_3 < NH_4^+$. ✓
3. Electronegativity of increases as $SO_3^{2-} < SO_4^{2-} < H_2S$
4. Electronegativity of an atom inversely proportional to the atomic radius. ✓
5. O has the 2nd most highest electronegativity from the electronegativity of elements in the peiodic table. ✓

08. following properties are shown by aqueous X

I. Adding $BaCl_2$ solution to X given white precipitate which dissolves in dil HCl

II. Adding H_2O_2 to the aqueous solution of X and then $BaCl_2$ solutions gives white precipitate which insoluble in dil HCl

Anion X is,



09. Mass of iron nail increases by 20% due to corrosion. Fomula of corroded ion is Fe_2O_3 . Find percentage that get corroded with respect to mass of total iron. (Relative atomic mass of Fe is 56)

1. 23.3%

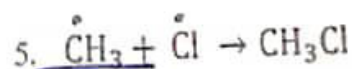
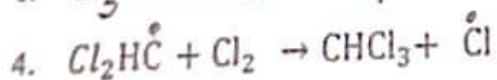
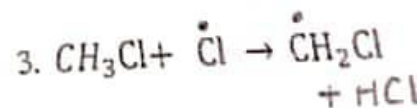
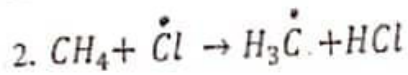
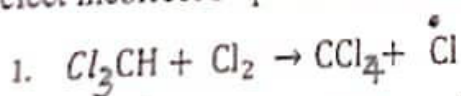
2. 46.6%

3. 20%

4. 25%

5. 40%

10. Select incorrect step of the mechanism of clorination of alkene.



11. X^{2+} ion oxidizes into X^{n+} by MnO_4^- in acidic medium. 2×10^{-3} mol of MnO_4^- needed to oxidize 50cm^3 of 0.1mol dm^{-3} X^{2+} ions. What is the value of 'n' ?

1. 1 2. 2 3. 3 4. 4 5. 5

12. A set of molecule/ ion which have four atoms in the same plane is,

1. BCl_3, SO_3^{2-} 2. $XeOF_2, SO_3$ 3. NO_3^-, NH_3 ✗
4. $SO_3^{2-}, XeOF_2$ ✗ 5. $SO_3, HCHO$ ✗

13. The concentration of K^+ in a K_2SO_4 solution is 0.02mol dm^{-3} . Find the composition of K_2SO_4 in, ($K = 39, S = 32, O = 16$)

1. 1560 2. 870 3. 1724 4. 1740 5. 3480

14. The products formed when excess S and NaOH reacted,

1. Na_2S, Na_2SO_3, H_2O 2. $Na_2S_2O_3, Na_2S, H_2O$ ✗
3. Na_2S, SO_2, H_2O ✗ 4. Na_2SO_3, Na_2SO_3, H_2O ✗
5. $Na_2S_2O_3, SO_2, H_2O$ ✗

15. 0.48g of sample of MnO_2 was dissolved in dil. H_2SO_4 and excess 1.9g of $FeSO_4$ was added to it. The volume of 0.1mol dm^{-3} $KMnO_4$ necessary to titrate with this solution was 15cm^3 . Mass percentage of MnO_2 in the sample is, ($Mn = 55, O = 16, S = 32$)

1. 30% 2. 45% 3. 50% 4. 60% 5. 66%

22 A/L අයි පේපර්ස් [papers grp]

16. What is the cation that gives,

I. Gives yellow brown solution with excess NH_3

II. Gives blue coloured solution with conc. HCl

III. Does not give precipitate when H_2S gas is passed in the acidic medium,

1. Cu^{2+} ✗ 2. Ni^{2+} ✗ 3. Co^{2+} 4. Fe^{2+} ✗ 5. Mn^{2+}

17. Pressure of 1.6 g of $CH_4(g)$ gas included in a vessel with V volume is $1 \times 10^5\text{Pa}$. N_2 gas is included to same vessel until pressure become $4 \times 10^5\text{Pa}$. The number of moles of N_2 gas that included to the vessel is,

1. 0.30 2. 0.25 3. 0.20 4. 0.15 5. 0.10

18. Butane (C_4H_{10}) is used as a fuel in domestic gas cylinders. The mass of O_2 has to be used to generate energy by complete combustion of 1kg of butane is, ($C = 12, H = 1, O = 16$)

1. 3.20 kg 2. 3.40 kg 3. 3.51 kg 4. 3.82 kg 5. 3.60 kg

The temperature raise when 100cm^3 of 1mol dm^{-3} $\text{NaOH}_{(aq)}$ and 100cm^3 of 1mol dm^{-3} HCl are mixed together in a thermostat beaker is. (Ignore the heat absorbed by the container)

Enthalphy of neutralization of $\text{NaOH}/\text{HCl} = -57\text{KJ mol}^{-1}$

Specific heat capacity of the solution = $4.2\text{J g}^{-1}\text{K}^{-1}$

Density of solution = 1g cm^{-3}

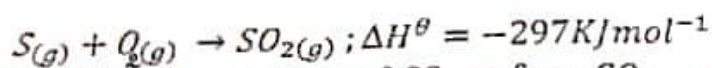
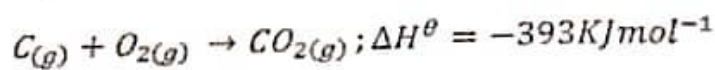
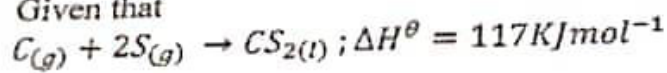
1. 3°C 2. 4.2°C 3. 5.6°C 4. 6.8°C 5. 20°C

20. In Correct statement regarding compound formed by element nitrogen N is,

- A) Sodium forms Na_3N when it reacts with N_2 \times
 B) All ammonium salts evolve NH_3 when adding base.
 C) Chloride of N_2 gives HCl and NH_3 when it undergoes hydrolysis. \times

1. A and C correct 2. A and B correct 3. C and B correct
 4. All correct 5. Only C correct

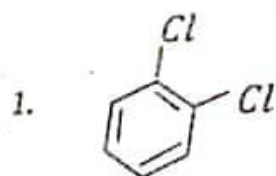
21. Given that



The heat of combustion of $\text{CS}_{(l)}$ to form $\text{CO}_{2(g)}$ and $\text{SO}_{2(g)}$ is,

1. -1104KJ mol^{-1} 2. $+1104\text{KJ mol}^{-1}$ 3. $+807\text{KJ mol}^{-1}$
 4. -807KJ mol^{-1} 5. $+1041\text{KJ mol}^{-1}$

22. Select the molecules having dipole moment (μ),



2. cis-1, 2 - dibromoethene \times

3. H_2O_2

4. XeF_4

5. XeOF_4

22 A/L ଫାଇଲ୍ [papers grp]

23. Select the correct order of electronegativity of central atom of the ions/ molecules given below

1. $\text{NH}_2^- < \text{NH}_4^+ < \text{CF}_4 < \text{CCl}_4$ \times
 2. $\text{NH}_4^+ < \text{CF}_4 < \text{CCl}_4 < \text{NH}_2^-$ \times
 3. $\text{CF}_4 < \text{CCl}_4 < \text{NH}_2^- < \text{NH}_4^+$
 4. $\text{CCl}_4 < \text{CF}_4 < \text{NH}_2^- < \text{NH}_4^+$
 5. $\text{CCl}_4 < \text{CF}_4 < \text{NH}_4^+ < \text{NH}_2^-$ \times

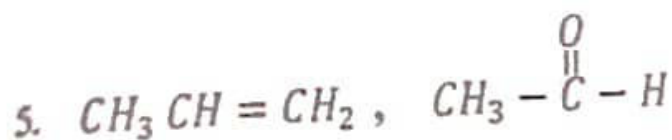
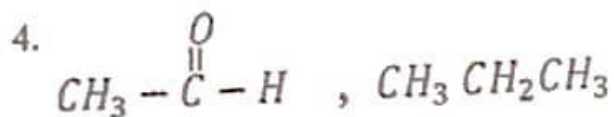
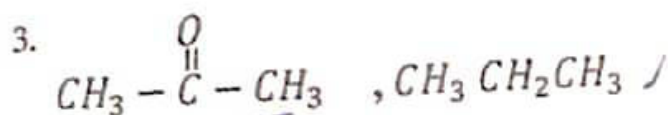
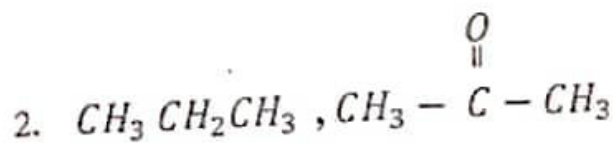
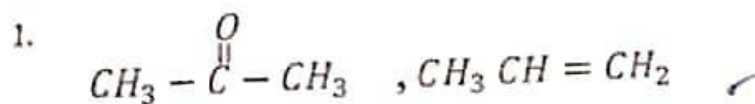
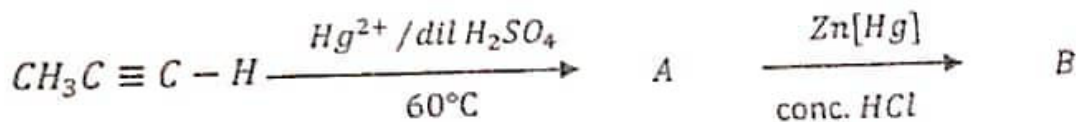
Incorrect statement regarding gases is,

1. Compressibility factor Z , is the ratio of actual molar volume of a gas to the molar volume of it if it behave as an ideal gas at that temperature and pressure. ✓
2. In Vander Wall's equation $\frac{an^2}{y^2}$ a is a constant related to the magnitude of attractive forces and is independent of temperature and pressure.
3. The kinetic energy of a gas depends only on the Kelvin temperature. ✓
4. The more gas particles, the greater the frequency of collisions with the walls of the container, the lower the pressure. ✓
5. The lowest hypothetical or imaginary temperature at which gases are supposed to occupy zero volume is called absolute zero.

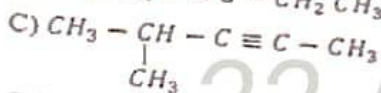
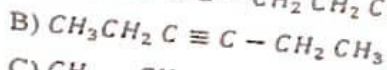
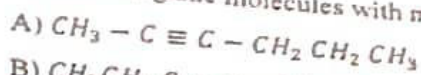
25. Select correct statement regarding s - block elements.

1. BH_3 can be prepared when B react with H_2 at high temperature and BH_3 is stable. ✗
2. Only Group 1 elements form their peroxides. ✗
3. Lithium forms unstable nitride when Li reacts with N_2
4. Mg has the lowest melting point from the all group 2 elements.
5. Li reacts with water vigorously with ignition. ✗

26. Consider reaction chain given below select A and B ,



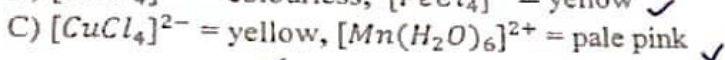
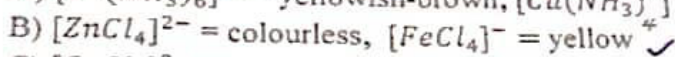
27. Consider organic molecules with molecular formula C_9H_{16} ,



Select correct answer.

	Type of isomer	Example
1.	Chain isomer	A, B ✓
2.	Functional group isomer	A, C ✗
3.	Position isomer	A, B ✓
4.	Chain isomer	B, C
5.	Position isomer	A, C ✗

28. Select correct colour given for each complex in each group.



1. A, B

2. B, C

3. C, D


4. Only B

5. yellow C

29. Consider reactions (i), (ii) and (iii) given below and find correct their reaction types respectively.



A_E = Electrophilic addition



S_E = Electrophilic substitution

S_N = Nucleophilic substitution

A_N = Nucleophilic addition



1. A_E, S_E, A_N

2. A_E, A_N, S_N ✗

3. A_E, S_E, S_N

4. S_E, A_E, S_N ✓

5. S_N, A_E, S_N ✗

30. When a concentrated solution of $K_2Cr_2O_7$ is treated with conc. H_2SO_4 , the bright red acidic oxide X of chromium is precipitated. On heating X, the green amphoteric oxide Y is obtained. Y could also be obtained on heating $(NH_4)_2Cr_2O_7$. X and Y can be,

1. Cr_2O_3, CrO_3

2. CrO_3, Cr_2O_3 ✓

3. Cr_2O_5, Cr_2O_3 ✓

4. CrO_3, Cr_2O_5

5. CrO_2, Cr_2O_3 ✓

❖ For each of the questions 31 to 40, one or more responses out of the four responses (a), (b), (c) and (d) given is/are correct. Select the correct response / responses. In accordance with the instructions given on your answer sheet, mark

- (1) if only (a) and (b) are correct.
- (2) if only (b) and (c) are correct.
- (3) if only (c) and (d) are correct.
- (4) if only (d) and (a) are correct.
- (5) if any other number or combination of responses is correct.

Summary of above Instructions

(1)	(2)	(3)	(4)	(5)
Only (a) and (b) are correct	Only (b) and (c) are correct	Only (c) and (d) are correct	Only (d) and (a) are correct	Any other number or combination of responses is correct

31. Select correct statement/ statements of simple covalent compound with oxygen and nitrogen.

- a. H_2O_2 acts as both oxidizing agent and as reducing agent. ✓
- b. NH_3 acts only as a base not as an acid. ✗
- c. Bond angle NF_3 is greater than bond angle of NH_3 . ✗
- d. SO_2 acts as both oxidizing agent as well as reducing agent. ✓

(4)

32. Select correct statement/ statements regarding alkynes.

- a. All alkynes make carbonyl compounds when react with Hg^{2+} and dil H_2SO_4 .
- b. Alkynes those with terminal hydrogen release H_2 when it reacts with N_2 . ✓
- c. Alkyne makes alkene when it reacts with $\frac{H_2}{Pd}$, $BaSO_4$, quinoline. ✓
- d. All alkynes make alkene magnesium halides when react with Grignard reagent. ✗

(2)

33. When any reaction occurs spontaneously at constant temperature and pressure.

- a. Enthalpy of the system decreases. ✓
- b. Entropy of system increases. ✓
- c. No change in entropy of the system. ✗
- d. Increases the enthalpy of the system.

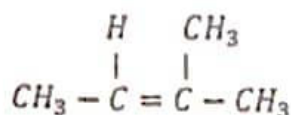
(1)

34. Correct statement/ statements regarding 3d- block elements and their compounds is/ are,

- a. All compounds formed by Ti are colourless. ✓
- b. $Ni(OH)_2$ insoluble in excess ammonia solution. ✗
- c. All d- block elements except Zn are transition metal. ✗
- d. Colour of $[CoCl_4]^{2-}$ is blue in colour and during dilution it converts to $[Co(H_2O)_6]^{2+}$ pink solution. ✓

(4)

35. Correct statement regarding products formed by compound P given below by adding HBr is/are,



- a. Main product formed is tertiary alkyl halide. ✓
b. Reaction is electrophilic addition. ✓
c. Main product is given via secondary carbonation. ✗
d. Product given by P with HBr in the presence of peroxide shows stereoisomerism. ✗

36. Correct statement/ statements regarding real real gases that used to correction factor for the ideal gas equation is/ are,

- a. Lowering pressure of a real gas is due to intermolecular interactions. ✓
b. effective volume of molecular movement of real gas at high pressure increase. ✗
c. Volume of ideal gas at high pressure is lower than the volume of a real gas at high pressure. ✗
d. Pressure exerted by real gas is lower than pressure exerted by ideal gas at same conditions. ✓

37. Correct statement/ statements regarding elements in 18th group of the periodic table.

- a. All element have positive enthalpy of element gain. ✗
b. Xe has oxidation numbers +2, +4, +6 and +8. ✓
c. Electron pair geometry of XeF_2 is tetrahedral. ✗
d. He has the highest enthalpy of gain.

38. Correct statement/ statements is/ are,

- a. Line spectrum of hydrogen confirms the quantization of energy. ✓
b. All atomic orbitals have same energy. ✗
c. ΔE volume of emission spectrum, is positive. ✗
d. Shape of atomic orbitals is decided by azimuthal quantum number. ✓

39. Correct statement/ statements regarding nitrogen containing compounds,

- a. NCl_3 is an ionic compound. ✗
b. NCl_3 make an acid and a base by reacting it with H_2O . ✓
c. Thermal decomposition of NH_4NO_2 release N_2 gas. ✓
d. NH_4^+ salts releases H_2 when reacts with a base. ✗

40. Boiling point of Br_2 is lower than boiling point of ICl . Correct statement/ statements is/ are,

- a. Both Br_2 and ICl are isoelectronic species.
b. Br_2 molecules are non-polar and molecules ICl are polar. ✓
c. Inter molecular interactions of ICl are greater than the intermolecular interactions of Br_2 . ✓
d. Considerable amount of energy needed to for the boiling of any chemical species having strong dipole-dipole interactions. ✓

In question Nos. 41 to 50, two statements are given in respect of each question. From the Table given below, select the response, out of the responses (1), (2), (3), (4) and (5), that best fits the two statements and mark appropriately on your answer sheet.

Response	First Statement	Second Statement
(1)	True	True, and correctly explains the first statement
(2)	True	True, but does not explain the first statement correctly
(3)	True	False
(4)	False	True
(5)	False	False

	1 st statement	2 nd statement
41	The most stable oxide of Mn is MnO_2 ✓	Oxidation number of Mn affects the acidity or acidity of their oxides. ✓ - (1)
42	There are equal number of moles for the any gases with same volume at constant temperature and pressure. ✓	Molar volume of an ideal gas at $0^\circ C$ and 1atm pressure is $22.4 dm^3$ ✓ (1)
43	Alkyhydrogen sulfate make alkene reacts with cold conc. H_2SO_4 ✓	Electrophilic addition reactions occur via intermediate carbocation. ✓
44	ΔS of the reaction $N_{2(g)} + 3H_{2(g)} \rightleftharpoons 2NH_{3(g)}$ is negative value. Higher temperature are favorable for the reaction. ✓	Entropy of a reaction decreases due to lower number of gaseous products. ✓ - (2)
45	Water solubility of group I carbonates increases down the group. ✗	Only lattice energy affects the solubility of salt. ✗
46	NH_3 evolves when $NaNH_2$ reacts with $H-C \equiv C-H$ (Acetylene) ✗ ✓	Electronegativity of C with triple bonds in alkynes higher due to sp hybridization when compared to other hydrocarbons. ✓ - (2)
47	Boiling point of HF is grater than other hydrogen halides. ✓	H atom when join with electronegative atoms can make Hydrogen bonds. ✗
48	Boiling point of pentane is lower than 2,2-dimethylpropane. ✗	Secondary interaction forces strength decreases when increasing surface area of molecules. ✗ - (5)
49	Few atoms are having positive electron gain energy. ✓	Electron-repulsion forces are prominent when gaining electrons to the atom of the most stable electron configuration. ✓ - (1)
50	The reaction, $N_{2(g)} + 2O_{2(g)} \rightarrow 2NO_{2(g)}$ ✓ Occurs when gaining external energy. ✓	N_2 is an inert gas towards reactions. ✓ - (2)